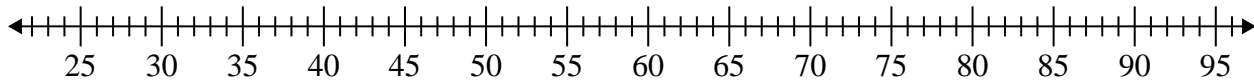


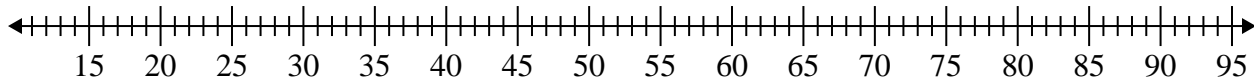


Create a box plot from the set of numbers.

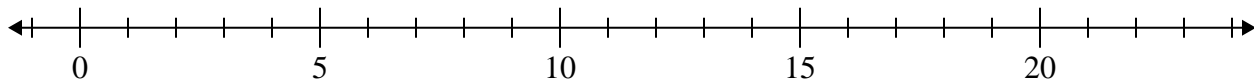
- 1) 58, 89, 31, 59, 79, 28, 79, 46, 39, 88



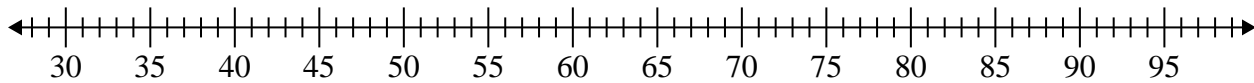
- 2) 21, 77, 43, 84, 68, 89, 34, 26, 89, 89, 33, 34



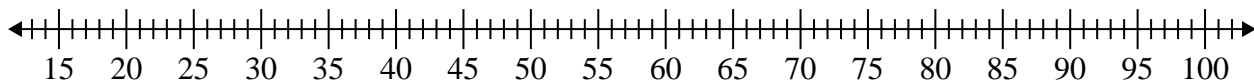
- 3) 13, 14, 11, 14, 15, 11, 19, 10



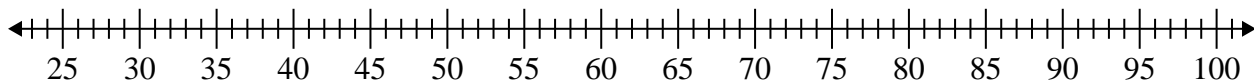
- 4) 58, 68, 33, 46, 66, 78, 90, 51



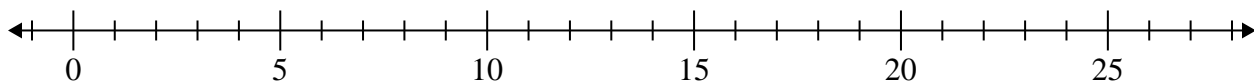
- 5) 57, 40, 39, 44, 25, 42, 95, 64



- 6) 53, 87, 91, 59, 63, 68, 51, 54, 31, 43, 37, 60



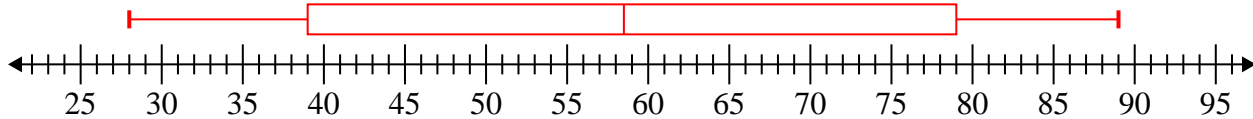
- 7) 19, 14, 8, 16, 9, 11, 18



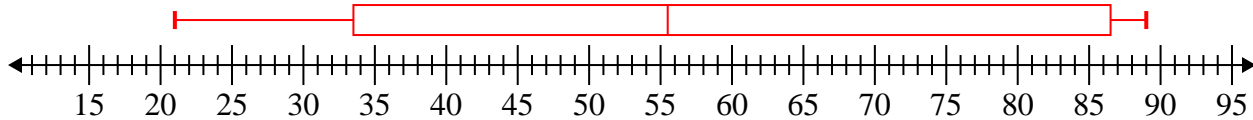


Create a box plot from the set of numbers.

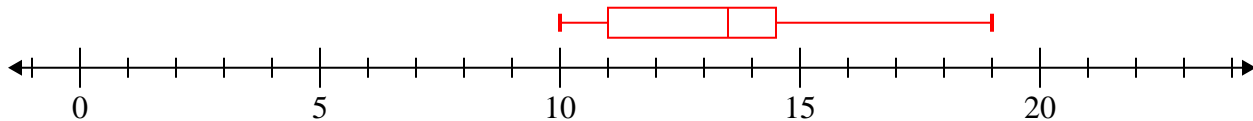
- 1) 58, 89, 31, 59, 79, 28, 79, 46, 39, 88 **Min=28 Max=89  $q_1=39$   $Q_2=58.5$   $q_3=79$**



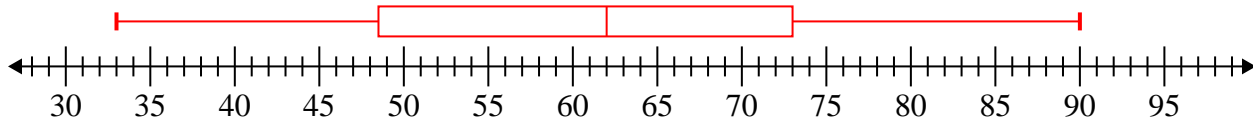
- 2) 21, 77, 43, 84, 68, 89, 34, 26, 89, 89, 33, 34 **Min=21 Max=89  $q_1=33.5$   $Q_2=55.5$   $q_3=86.5$**



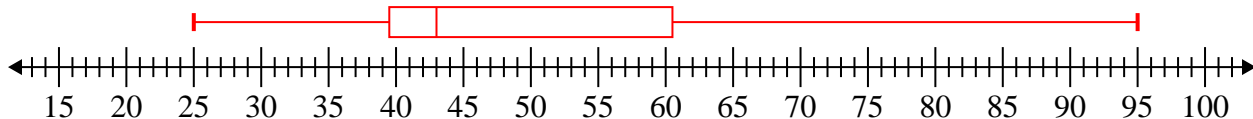
- 3) 13, 14, 11, 14, 15, 11, 19, 10 **Min=10 Max=19  $q_1=11$   $Q_2=13.5$   $q_3=14.5$**



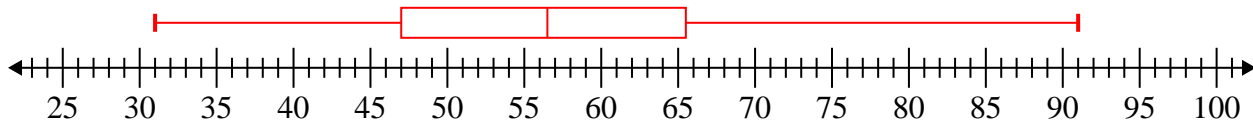
- 4) 58, 68, 33, 46, 66, 78, 90, 51 **Min=33 Max=90  $q_1=48.5$   $Q_2=62$   $q_3=73$**



- 5) 57, 40, 39, 44, 25, 42, 95, 64 **Min=25 Max=95  $q_1=39.5$   $Q_2=43$   $q_3=60.5$**



- 6) 53, 87, 91, 59, 63, 68, 51, 54, 31, 43, 37, 60 **Min=31 Max=91  $q_1=47$   $Q_2=56.5$   $q_3=65.5$**



- 7) 19, 14, 8, 16, 9, 11, 18 **Min=8 Max=19  $q_1=9$   $Q_2=14$   $q_3=18$**

